










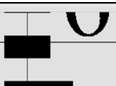






Nome: _____

Curso/Turma/Período: _____ / _____ / _____ Data: ____ / ____ / _____ - Acertos: _____ em _____

  	FS: _____ FM: _____ FI: _____ Di: _____ DHc: _____	  	FS: _____ FM: _____ FI: _____ Di: _____ DHc: _____
 	FS: _____ FM: _____ FI: _____ Di: _____ DHc: _____	  	FS: _____ FM: _____ FI: _____ Di: _____ DHc: _____
 	FS: _____ FM: _____ FI: _____ Di: _____ DHc: _____	  	FS: _____ FM: _____ FI: _____ Di: _____ DHc: _____

	FS: _____ FM: _____ FI: _____ Di: _____ DHc: _____		FS: _____ FM: _____ FI: _____ Di: _____ DHc: _____
	FS: _____ FM: _____ FI: _____ Di: _____ DHc: _____		FS: 2,961 mm FM: 2,921 mm FI: 2,881 mm

Formulas:

$$H = F_s \quad F_i$$

$$DH_c = f/i \quad H \quad \cos^2 \alpha$$

$$D_i = f/i \quad H$$

Obs:

$$f/i = 100$$